

Name _____

Date _____

Class _____

Score _____

What time is it?

Skill: Telling time to the nearest half hour

Using clocks

Write the time.




8 o'clock



half past 10



Draw the hands.



half past 7




1 o'clock



half past 9



half past 6



half past 1



11 o'clock



half past 8



2 o'clock

Name _____

Date _____

Class _____


Score _____

What time is it?


Skill: Telling time to the nearest half hour

Using clocks


Write the time.




8 o'clock




half past 10




7 o'clock




half past 4




half past 8



4 o'clock




half past 2




half past 12


Draw the hands.




half past 7




1 o'clock




half past 9




half past 6




half past 1



11 o'clock



half past 8



2 o'clock