

Name \_\_\_\_\_

Date \_\_\_\_\_

Class \_\_\_\_\_

Score \_\_\_\_\_

# Counting coins Worksheets

Money math

Find the totals.



Write the totals in order, greatest first.

1st

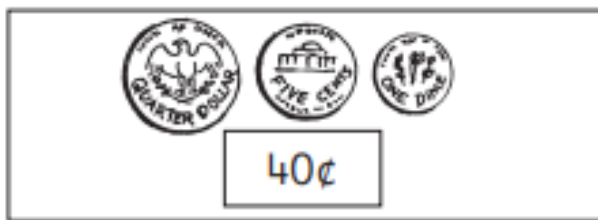
2nd

3rd 10¢

4th

5th

Find the totals.



Write the totals in order, smallest first.

1st

2nd

3rd

4th

5th 40¢

Name \_\_\_\_\_

Date \_\_\_\_\_

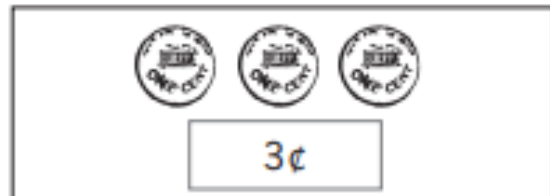
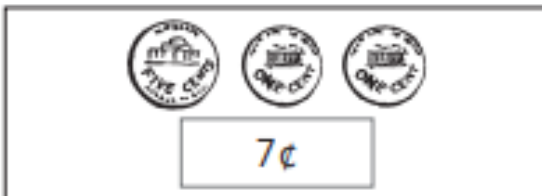
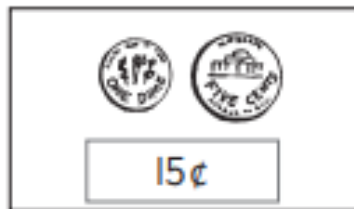
Class \_\_\_\_\_

Score \_\_\_\_\_

# Counting coins Worksheets

Money math


Find the totals.



Write the totals in order, greatest first.

1st 35¢    2nd 15¢    3rd 11¢    4th 7¢    5th 3¢

Find the totals.



Write the totals in order, smallest first.

1st 6¢    2nd 20¢    3rd 26¢    4th 31¢    5th 40¢

Have children practice writing amounts of money, using the symbol for cents (¢). Discuss strategies for adding money, such as adding the coins of greater value first